

## Third Semester B.E. Degree Examination, June/July 2024 Electrical Circuit Analysis

Time: 3 hrs.

Max. Marks: 100

*Note: Answer any FIVE full questions, choosing ONE full question from each module.*

### Module-1

- 1 a. Three resistances are connected in delta. Obtain expression for their star connected equivalents. (06 Marks)
- b. Reduce the network shown in Fig.Q.1(b) to a single voltage source in series with resistance using source shift and source transformation. (06 Marks)

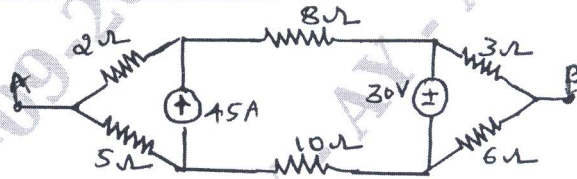


Fig.Q.1(b)

- c. In the circuit shown in Fig.Q.1(c), determine  $V_2$  which results in zero current through the  $4\Omega$  resistor use mesh analysis. (08 Marks)

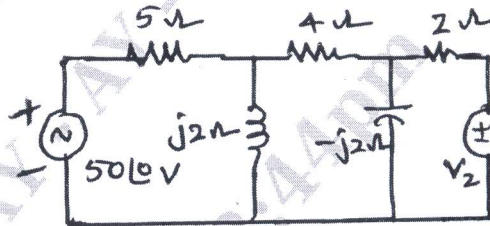


Fig.Q.1(c)

OR

- 2 a. Write the nodal equation for the circuit shown in Fig.Q.2(a) and then find power supplied by 5V source. (08 Marks)

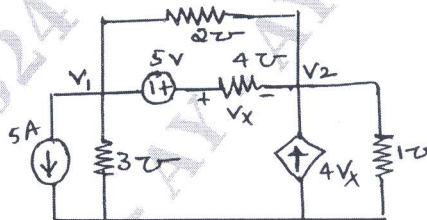


Fig.2.(a)

- b. For the network shown in Fig.Q.2(b) write the mesh equations. For the meshes indicated in time domain, draw the dual network and write node equation. (06 Marks)

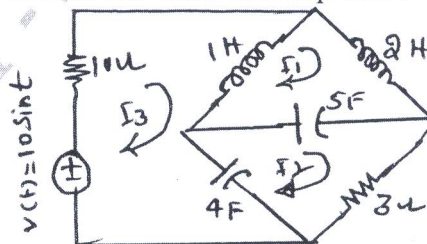


Fig.2.(b)

Important Note : 1. On completing your answers, compulsorily draw diagonal cross lines on the remaining blank pages.  
2. Any revealing of identification, appeal to evaluator and /or equations written eg, 42+8 = 50, will be treated as malpractice.

- c. For the circuit shown in Fig.Q.2(c), determine the resistance between M and N using star-delta transformation. (06 Marks)

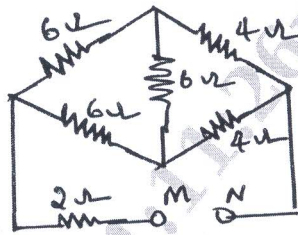


Fig.2.(c)

**Module-2**

- 3 a. State and explain superposition theorem. (06 Marks)  
 b. Use Millman's theorem to determine the voltage  $V_s$  of the network shown in Fig.Q.3(b)

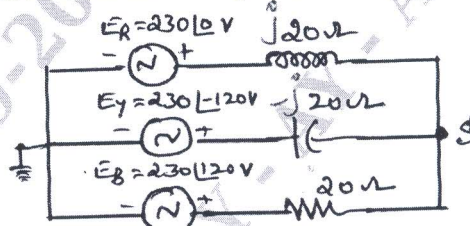


Fig.Q.3(b)

- c. Find the Thevenin's equivalent circuit at the terminals A and B of the network shown in Fig.Q.3(c). (06 Marks)

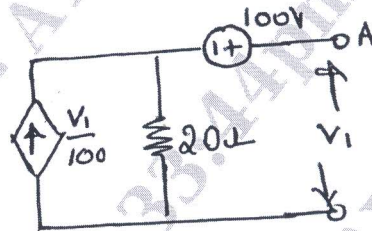


Fig.Q.3(c)

(08 Marks)

**OR**

- 4 a. Find the maximum power transferred to the load impedance  $Z_L$  shown in Fig.Q.4(a).

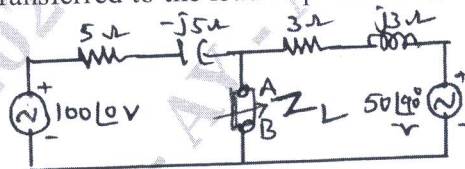


Fig.Q.4(a)

(08 Marks)

- b. Use Super position theorem, to find the current 'I' in the network shown in Fig.Q.4(b).

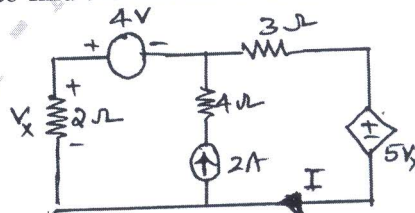


Fig.Q.4(b)

(08 Marks)

- c. State the reciprocity theorem. (04 Marks)

**Module-3**

- 5 a. Derive the expression for the resonant frequency ' $f_r$ ' for the parallel resonant circuit shown in Fig.Q.5(a). (08 Marks)

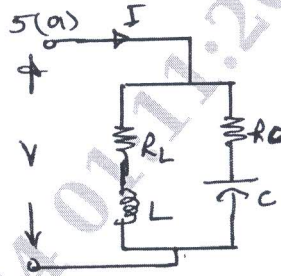


Fig.Q.5(a)

- b. A resistor and a capacitor are in series with a variable inductor across 100V, 50Hz supply. The maximum current obtained by varying inductance is 5A voltage across capacitance is then 250V. Find R, L and C (06 Marks)
- c. Find the value of ' $R_L$ ' for the circuit shown in Fig.Q.5(c) is resonant.

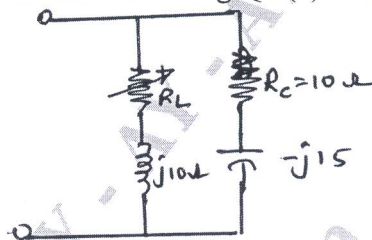


Fig.Q.5(c)

(06 Marks)

**OR**

- 6 a. In the circuit shown in Fig.Q.6(a) switch 'K' is changed from position 1 to 2 at time  $t = 0$ , steady state reached before switching. Find the value of  $i$ ,  $\frac{di}{dt}$  and  $\frac{d^2i}{dt^2}$  at  $t = 0+$ . (08 Marks)

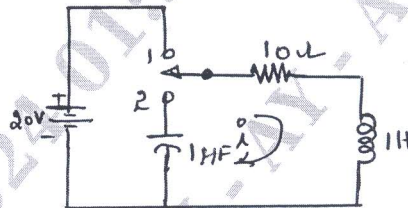


Fig.Q.6(a)

- b. In the given circuit shown in Fig.Q.6(b) switch 'K' is opened at time  $t = 0$ . Find  $v$ ,  $\frac{dv}{dt}$  and  $\frac{d^2v}{dt^2}$  at  $t = 0+$ . (06 Marks)

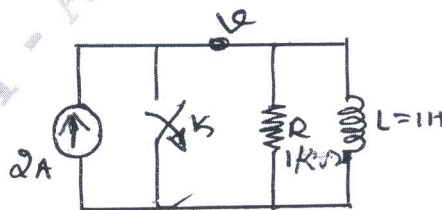


Fig.Q.6(b)

- c. In the network shown in Fig.Q.6(c) the switch 'K' is closed at  $t = 0+$ . Find the current  $i(t)$ . (06 Marks)

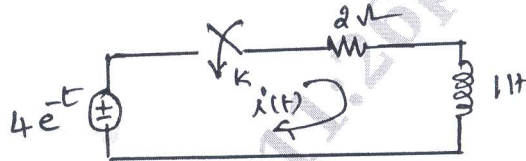


Fig.Q.6(c)

**Module-4**

- 7 a. State and prove initial value and final value theorem. (06 Marks)  
 b. Find the inverse Laplace transform of  $H(S)$  where  $H(S) = \frac{7S+2}{S^3+3S^2+2S}$ . (06 Marks)  
 c. Obtain the complete solution for current  $i(t)$  using Laplace transformation method. Assume all initial conditions are zero for the circuit shown in Fig.Q.7(c). (08 Marks)

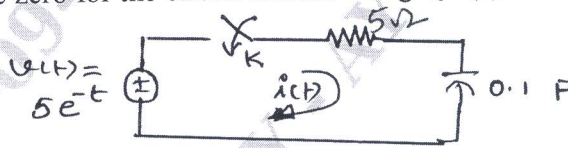


Fig.Q.7(c)

**OR**

- 8 a. Using the Laplace transformation of Ramp function, find the L.T. of triangular wave shown in Fig.Q.8(a). (08 Marks)

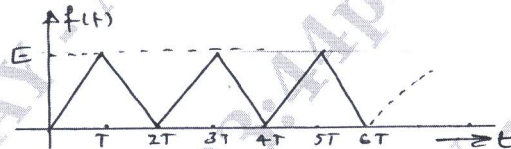


Fig.Q.8(a)

- b. Determine the L.T. of wave form shown in Fig.Q.8(b). (06 Marks)

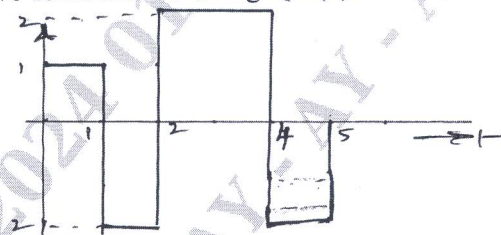


Fig.Q.8(b)

- c. Sketch the waveform from given equation  
 i)  $r(t+2) - r(t+1) - r(t-2) + r(t-3)$ . (06 Marks)

**Module-5**

- 9 a. A three phase, 3 wire, 400V delta connected load impedances.  $Z_{RY} = 10 \angle 0^\circ \Omega$ ,  $Z_{YB} = 10 \angle -30^\circ \Omega$ ,  $Z_{BR} = 10 \angle 30^\circ \Omega$ . Calculate the line currents and power consumed by each load. Also calculate total power. (10 Marks)

- b. A 400V, 3 $\phi$  supply feeds an unbalanced 3 wire star connected load shown in Fig.Q.9(b). For the phase sequence RYB. Determine line currents. (10 Marks)

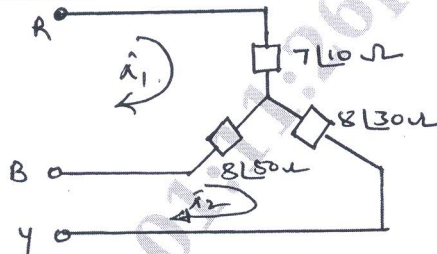


Fig.Q.9(b)

OR

- 10 a. Obtain the impedance parameter in terms of ABCD parameters. (06 Marks)  
 b. Find the Z-parameter of the network shown in Fig.Q.10(b). (08 Marks)

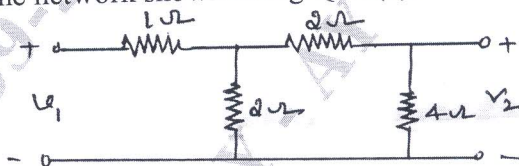


Fig.Q.10(b)

- c. Determine the ABCD parameter of the network shown in Fig.Q.10(c). (06 Marks)

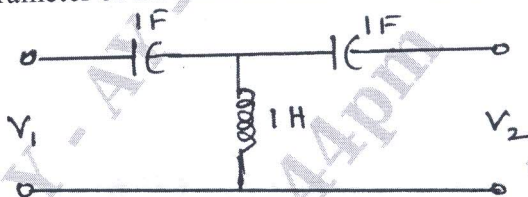


Fig.Q.10(c)

\*\*\*\*\*