


CBCS SCHEME



USN

--	--	--	--	--	--	--	--

15EE61

Sixth Semester B.E. Degree Examination, June/July 2023 Control Systems

Time: 3 hrs.

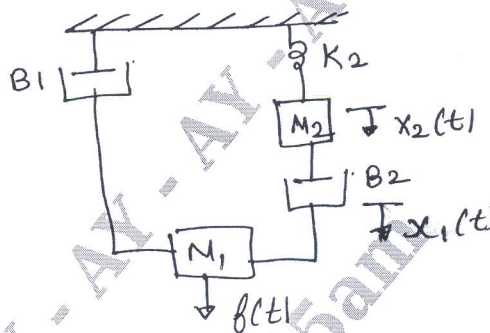
Max. Marks: 80

Note: Answer any FIVE full questions, choosing ONE full question from each module.

Module-1

- 1 a. Define control system. Distinguish between open loop and closed loop system with an example. (06 Marks)
- b. For the mechanical system shown in Fig.Q.1(b). Write the differential equation relating to the mechanical system. Also obtain electrical analogous circuits using i) F-V analogy ii) F-I analogy. (10 Marks)

Fig.Q.1(b)



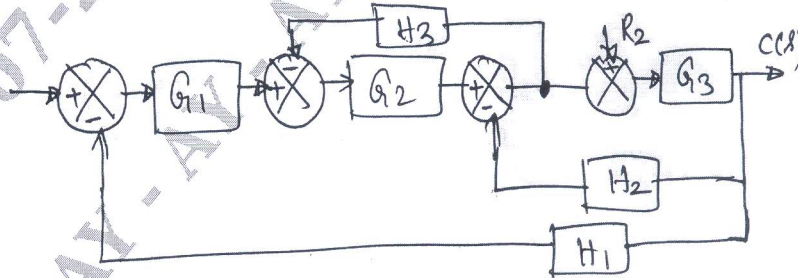
OR

- 2 a. Derive the transfer function of armature controlled DC motor. (06 Marks)
- b. Explain in detail the AC servomotor. (05 Marks)
- c. Explain the synchro as an error detector. (05 Marks)

Module-2

- 3 a. Determine using block reduction
 i) When $R_2 = 0$ $\frac{C(s)}{R_1(s)}$ ii) When $R_1 = 0$ $\frac{C(s)}{R_2(s)}$. (10 Marks)

Fig.Q.3(a)



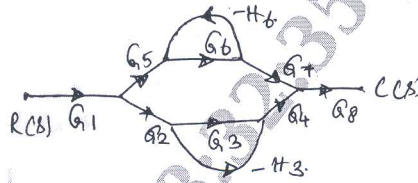
- b. Define : i) Source and sink node ii) Loop and forward path iii) Error signal and primary feed back signal. (06 Marks)

Important Note : 1. On completing your answers, compulsorily draw diagonal cross lines on the remaining blank pages.
2. Any revealing of identification, appeal to evaluator and /or equations written eg, 42+8=50, will be treated as malpractice.

OR

- 4 a. Explain Mason's gain formula indicating each term. (04 Marks)
 b. Find: $\frac{C(s)}{R(s)}$ by Mason's gain formula.

Fig.Q.4(b)



- c. What is transfer function? List the limitations of transfer function. (08 Marks)
 (04 Marks)

Module-3

- 5 a. Derive the time Domain specification
 i) Peak time (T_p) ii) Rise time (T_r). (06 Marks)
 b. What are the necessary and sufficient condition for the system to be stable as for RF criteria? (04 Marks)
 c. An unity feedback system has $G(S) = \frac{20(1+s)}{s^2(2+s)(4+s)}$. Calculate its steady state error co-efficient and error when the applied input is $r(t) = 40 + 2t + 5t^2$. (06 Marks)

OR

- 6 a. The open loop transfer function of a unity feedback system is given by $G(s) = \frac{10K(s+0.5)}{s^2(s+2)(s+1)}$. Find the values of K. (05 Marks)
 b. Comment on stability using routh criteria of characteristic equation. $s^5 + 2s^4 + 24s^3 + 48s^2 - 25s - 50 = 0$. (05 Marks)
 c. Derive an expression for response of second order underdamped system for unit step input. (06 Marks)

Module-4

- 7 a. Write a note on frequency domain specifications. (06 Marks)
 b. Sketch the complete root locus of system having $G(S)H(S) = \frac{K}{s(s+1)(s+2)(s+3)}$. (10 Marks)

OR

- 8 a. Derive an expression for resonant peak and resonant frequency for a second order system. (06 Marks)
 b. For the following transfer function draw bode plot and obtain gain cross over frequency $G(s) = \frac{20}{s(1+3s)(1+4s)}$. (10 Marks)

Module-5

- 9 a. Explain the Nyquist stability criteria. (06 Marks)
 b. Explain step by step procedure to design lag compensation network. (10 Marks)

OR

- 10 a. Sketch the Nyquist plot and comment on the stability of the closed loop system whose open loop transfer function is $G(s)H(s) = \frac{5}{s(1-s)}$. (10 Marks)
 b. Write notes on PID controller. (06 Marks)
