

USN									
-----	--	--	--	--	--	--	--	--	--

Third Semester B.E. Degree Examination, Jan./Feb. 2023 Control Systems

Time: 3 hrs.

Max. Marks: 80

- Note:** 1. Answer any FIVE full questions, choosing ONE full question from each module.
2. Write neat sketches wherever required.

Module-1

- 1 a. Distinguish between open loop and closed loop control systems and give one practical example of each. (06 Marks)
- b. For the system shown in Fig.Q1(b).
 - i) Draw the mechanical network
 - ii) Write the differential equations
 - iii) Draw torque-voltage analogous electric network. (10 Marks)

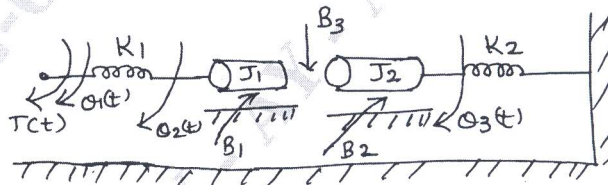


Fig.Q1(b)

OR

- 2 a. Define transfer function and what are its properties. (06 Marks)
- b. Obtain the transfer function for the block diagram shown in Fig.Q2(b). Using block diagram reduction method. (10 Marks)

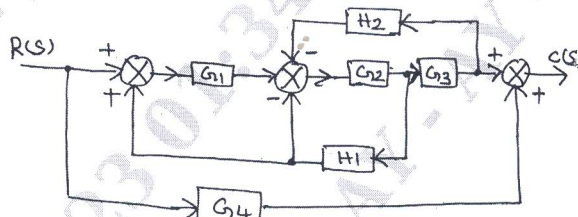


Fig.Q2(b)

Module-2

- 3 a. What is signal-flow graph representation? Briefly explain the properties of signal flow graph. (06 Marks)
- b. Obtain the closed loop transfer function $\frac{C(s)}{R(s)}$ for the signal flow graph of a system show in Fig.Q3(b) using Mason's gain formula. (10 Marks)

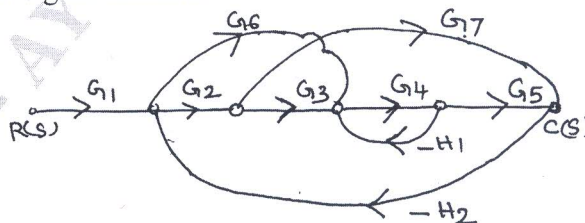


Fig.Q3(b)

Important Note : 1. On completing your answers, compulsorily draw diagonal cross lines on the remaining blank pages.
2. Any revealing of identification, appeal to evaluator and /or equations written eg, 42+8 = 50, will be treated as malpractice.

OR

- 4 a. Derive expressions for peak time t_p and peak overshoot M_p of an under damped second order control system subjected to step input. (06 Marks)
- b. A unity feedback system is characterized by an open loop transfer function $G(S) = \frac{K}{s(s+10)}$. Determine the gain K so that the system will have a damping ratio of 0.5. For this value of K determine the peak time and peak overshoot for a unit step input. (06 Marks)
- c. For a unity feedback control system with $G(S) = \frac{40(S+2)}{S(S+1)(S+4)}$. Determine all static error coefficients (04 Marks)

Module-3

- 5 a. Find the number of roots of this equation with positive real part, zero real part and negative real part. $S^6 + 4s^5 + 3s^4 - 16s^2 - 64s - 48 = 0$. (08 Marks)
- b. For unity feedback system $G(s) = \frac{k}{s(1+0.4s)(1+0.25s)}$. Find range of value of k , marginal value of k and frequency of sustained oscillation. (08 Marks)

OR

- 6 a. Explain the terms : i) Asymptotes ii) Centroid iii) break-way point. (08 Marks)
- b. A feedback control system has open loop transfer function $G(s)H(s) = \frac{k}{s(s+4)(s^2+4s+20)}$ plot the root locus for $k = 0$ to ∞ . Indicate all the point on it. (08 Marks)

Module-4

- 7 a. A system of third order shows resonance peak of 2 and resonance frequency of 3 rad/sec. Determine the transfer function of equivalent second order system and hence find T_r , T_p , T_s and % overshoot. (08 Marks)
- b. For a particular unity feedback, $G(s) = \frac{242(s+5)}{s(s+1)(s^2+5s+121)}$. Sketch the bode plot. Find ω_{gc} and ω_{pc} . G.M, P.M. (08 Marks)

OR

- 8 a. Consider type2 system with transfer function $G(s)H(s) = \frac{1}{s^2(1+T_s)}$. Obtain its polar plot. (08 Marks)
- b. For a certain control system $G(s)H(s) = \frac{k}{s(s+2)(s+10)}$. Sketch the Nyquist plot and hence calculate the range of values of k for stability. (08 Marks)

Module-5

- 9 a. Obtain the state model of the electrical network shown in Fig Q9(a) in the standard form. Given $t = t_0$, $i(t) = i(t_0)$ and $v_0(t) = v_0(t_0)$.

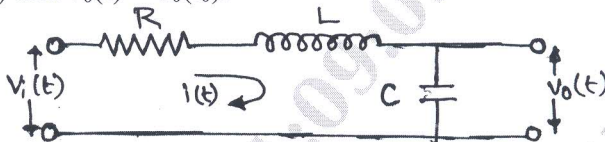


Fig Q9(a)

(08 Marks)

- b. Consider a system having state model

$$\begin{bmatrix} \dot{x}_1 \\ \dot{x}_2 \end{bmatrix} = \begin{bmatrix} -2 & -3 \\ 4 & 2 \end{bmatrix} \begin{bmatrix} x_1 \\ x_2 \end{bmatrix} + \begin{bmatrix} 3 \\ 5 \end{bmatrix} u \text{ and } Y = [1 \ 1] \begin{bmatrix} x_1 \\ x_2 \end{bmatrix}, \text{ with } D = 0. \text{ Obtain its transfer function.}$$

(08 Marks)

OR

- 10 a. Obtain the complete time response of the systems given by $\dot{x}(t) = \begin{bmatrix} 0 & 1 \\ -2 & 0 \end{bmatrix} x(t)$ where

$$x(0) = \begin{bmatrix} 1 \\ 1 \end{bmatrix} \text{ and } Y(t) = [1 \ -1] x(t).$$

(10 Marks)

- b. Find the state transition matrix of the state equation $\begin{bmatrix} \dot{x}_1 \\ \dot{x}_2 \end{bmatrix} = \begin{bmatrix} 1 & 0 \\ 0 & 1 \end{bmatrix} \begin{bmatrix} x_1 \\ x_2 \end{bmatrix} + \begin{bmatrix} 1 \\ 1 \end{bmatrix} U$, using the inverse transform method.

(06 Marks)
