

Third Semester B.E. Degree Examination, July/August 2022
Electric Circuit Analysis

Time: 3 hrs.

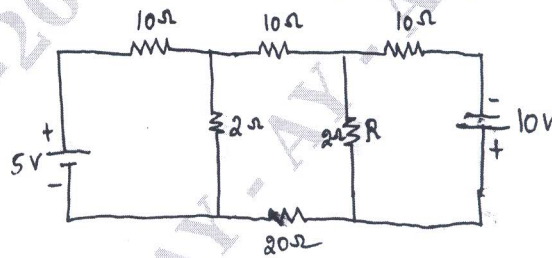
Max. Marks: 100

Note: Answer any FIVE full questions, choosing ONE full question from each module.

Module-1

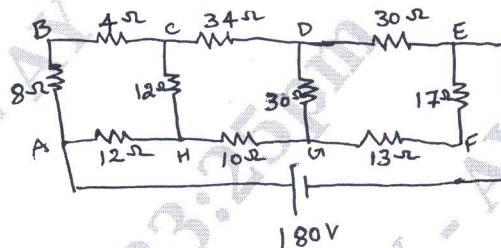
- 1 a. Find the Voltage across resistance R in the network Fig. Q1(a) by Mesh analysis. (08 Marks)

Fig. Q1(a)



- b. Find the current in the 10Ω resistor in the given network shown in Fig. Q1(b) by using Star - delta transformation. (06 Marks)

Fig. Q1(b)

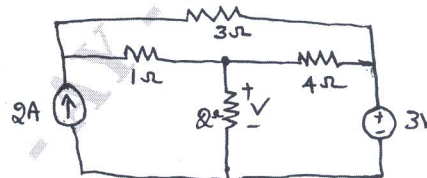


- c. Distinguish between : i) Active and Passive Elements ii) Ideal and Practical sources
iii) Lumped and distributed network. (06 Marks)

OR

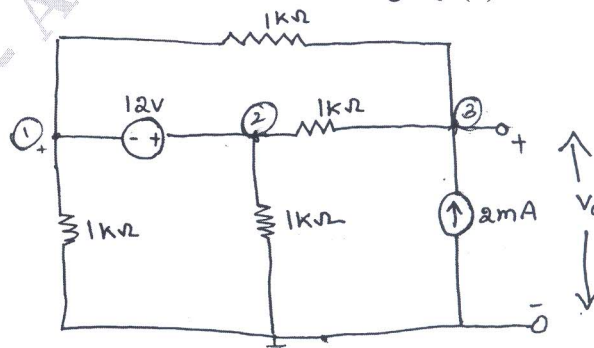
- 2 a. Use source shifting and transformation techniques to find voltage across 2Ω resistor show in Fig. Q2(a). (08 Marks)

Fig. Q2(a)



- b. Use the nodal analysis to find V_o in the network shown in Fig. Q2(b). (06 Marks)

Fig. Q2(b)



- c. Determine the current I_o in the circuit of Fig. Q2(c) using Mesh analysis.

(06 Marks)

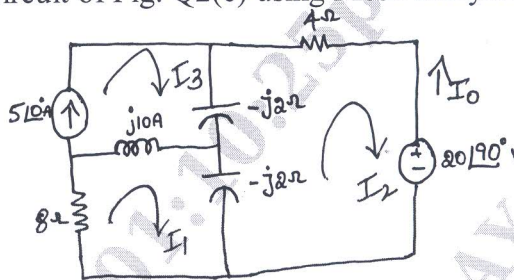
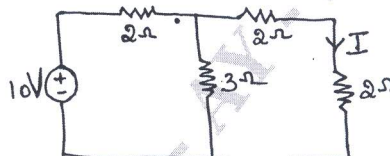


Fig. Q2(c)

Module-2

- 3 a. State and explain Super Position theorem with example. (08 Marks)
 b. Verify the Reciprocity theorem for current I in the network given in Fig. Q3(b). (06 Marks)

Fig. Q3(b)

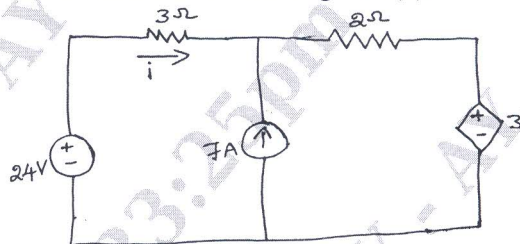


- c. State and explain Thevenin's theorem. (06 Marks)

OR

- 4 a. Find the current i using Super Position theorem for the Fig. Q4(a). (10 Marks)

Fig. Q4(a)



- b. State and prove Millman's theorem. (10 Marks)

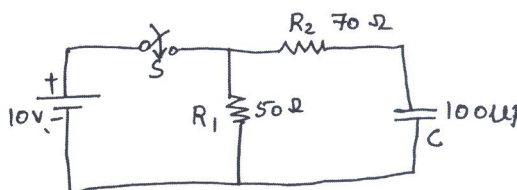
Module-3

- 5 a. Derive the expression for resonant frequency and quality factor (Q_s). Write expression for W_1 and W_2 and show that $\sqrt{W_1 * W_2} = W_0$. (08 Marks)
 b. An RLC series circuit has resistance of 10Ω a capacitance of $100\mu f$ and a variable inductance.
 i) Find the value of inductance for which, the voltage across resistance is maximum
 ii) Q factor.
 iii) Voltage drops across R , L and C . The applied voltage is $230V$, $50Hz$. (08 Marks)
 c. What are initial conditions and their use in Network Analysis? (04 Marks)

OR

- 6 a. What is Resonance? Derive expression for cut – off frequencies. (10 Marks)
 b. In the Fig. Q6(b), the switch S is closed at $t = 0$, find the time when the current from the battery reaches to $500mA$. (10 Marks)

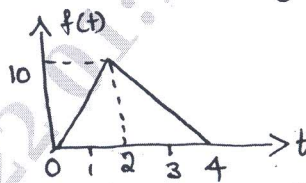
Fig. Q6(b)



Module-4

- 7 a. State and prove initial value theorem and Final Value theorem. (08 Marks)
 b. Obtain the Laplace transform of :
 i) Unit step functions $f(t) = u(t)$ ii) $f(t) = \sin wt$ iii) $f(t) = \sin h wt$. (06 Marks)
 c. Obtain the Laplace transform of the function shown in Fig. Q7(c). (06 Marks)

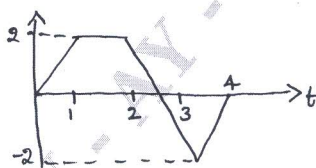
Fig. Q7(c)



OR

- 8 a. Find the Laplace transform of i) $f(t) = te^{-3t} u(t)$ ii) $5 + 4e^{-2t}$ iii) $e^{-at} \sin wt$ (10 Marks)
 iv) $t \cos at$. (10 Marks)
 b. Find the Laplace transform for the waveform shown in Fig. Q8(b). (10 Marks)

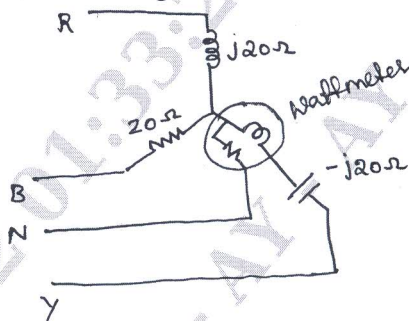
Fig. Q8(b)



Module-5

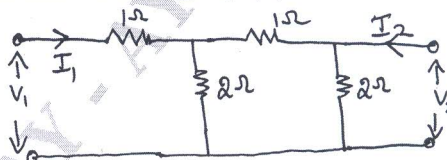
- 9 a. Find the reading on the Wattmeter in Fig. Q9(a). When the circuit is connected to a 400V , 3 - ϕ supply. The phase sequence is RYB. Neglect Wattmeter losses. (10 Marks)

Fig. Q9(a)



- b. Find Z parameters of the network shown in Fig. Q9(b). (10 Marks)

Fig. Q9(b)



OR

- 10 a. Define Y and Z parameters. Derive relation between Z and Y parameters. (10 Marks)
 b. Find Y parameters for the network shown in Fig. Q10(b). (10 Marks)

Fig. Q10(b)

