



# CBCS SCHEME

USN

--	--	--	--	--	--	--	--	--	--

18EE32

## Third Semester B.E. Degree Examination, Jan./Feb. 2021 Electric Circuit Analysis

Time: 3 hrs.

Max. Marks: 100

**Note: Answer any FIVE full questions, choosing ONE full question from each module.**

### Module-1

- 1 a. Define :
- i) Linear and non linear circuit
  - ii) Active and passive circuit
  - iii) Unilateral and bilateral circuit. (06 Marks)
- b. For the circuit shown in Fig.Q1(b) determine resistance between M and N using star/delta transformation.

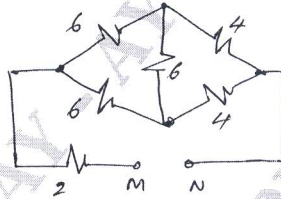


Fig.Q1(b)

(06 Marks)

- c. Use node voltage analysis to find node voltages in the network shown in Fig.Q1(c).

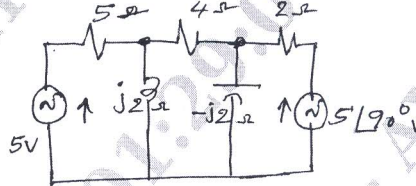


Fig.Q1(c)

(08 Marks)

OR

- 2 a. Derive an expression for converting Delta to Star. (06 Marks)
- b. Determine potential difference between M and N using source transformation of circuit shown in Fig.Q2(b).

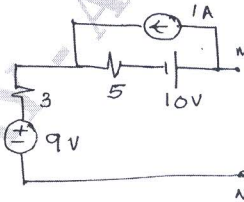


Fig.Q2(b)

(06 Marks)

- c. Use Mesh current analysis to find the current flowing in 30Ω resistor of circuit shown in Fig.Q2(c).

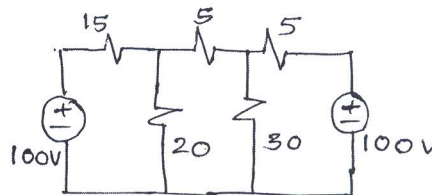


Fig.Q2(c)

(08 Marks)

Important Note : 1. On completing your answers, compulsorily draw diagonal cross lines on the remaining blank pages.  
2. Any revealing of identification, appeal to evaluator and /or equations written eg. 42+8 = 50, will be treated as malpractice.

**Module-2**

- 3 a. State and prove reciprocity theorem. (06 Marks)  
 b. For the circuit shown in Fig.Q3(b) find 'I<sub>x</sub>' using super position theorem.

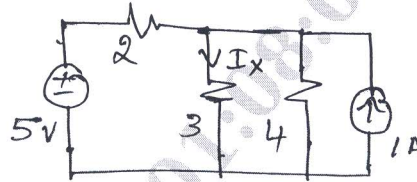


Fig.Q3(b)

(07 Marks)

- c. Use Milliman's theorem to find current in the circuit shown in Fig.Q3(c).

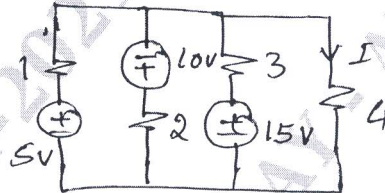


Fig.Q3(c)

(07 Marks)

**OR**

- 4 a. State and obtain condition for maximum power when load impedance is equal to pure variable resistance. (06 Marks)  
 b. For the network shown in Fig.Q4(b), find current 'I' using Norton's theorem.

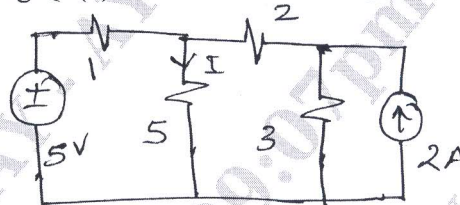


Fig.Q4(b)

(07 Marks)

- c. For the network shown in Fig.Q4(c). Draw Thevenin's equivalent circuit.

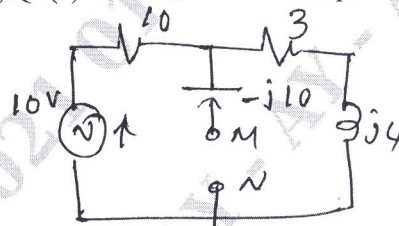


Fig.Q4(c)

(07 Marks)

**Module-3**

- 5 a. Show that resonant frequency is the geometric mean of cut-off frequencies. (07 Marks)  
 b. A series RLC circuit has a resistance of 100Ω, an inductance of 0.5H and capacitance of 0.4μF. Find the resonant frequency, half power frequencies, band width and quality factor. (07 Marks)  
 c. For the circuit shown in Fig.Q5(c), find the value of inductance take  $\omega = 500\text{r/s}$ .

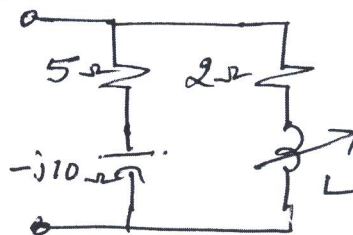


Fig.Q5(c)

(06 Marks)

OR

- 6 a. Explain the behavior of R, L and C for initial condition. (07 Marks)  
 b. For the network shown in Fig.Q6(b) switch is closed at  $t = 0$ . Determine current and its first and second derivative at  $t = 0^+$ .




Fig.Q6(b)

(07 Marks)

- c. For the R – L circuit shown in Fig.Q6(c). Obtain the expression for current  $i(t)$  for  $t \geq 0$ .

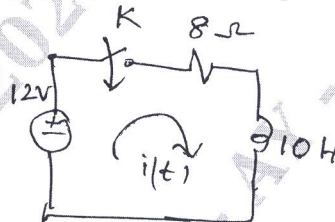


Fig.Q6(c)

(06 Marks)

**Module-4**

- 7 a. State and prove initial value theorem. (06 Marks)  
 b. Find the inverse Laplace transform of

$$V(s) = \frac{10}{s(s+1)(s+2)}$$

(07 Marks)

- c. For the network shown in Fig.Q7(c), draw the transformed circuit and obtain the expression for current  $i(t)$  for  $t \geq 0$ .

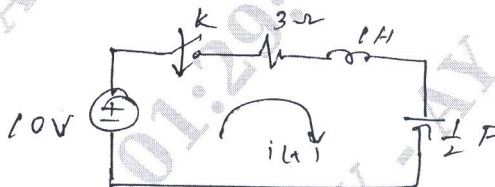


Fig.Q7(c)

(07 Marks)

OR

- 8 a. Find the ILT of : i) step signal ii) Ramp iii) impulse signal. (06 Marks)  
 b. For the waveform shown in Fig.Q8(b) obtain the Laplace transform.

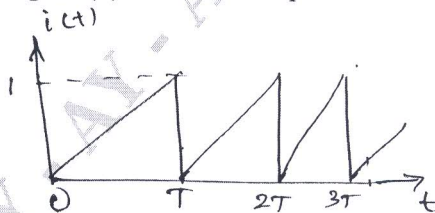


Fig.Q8(b)

(08 Marks)

- c. Find the initial and final value of following functions :

i)  $V_1(s) = \frac{s^2 + 3s + 2}{s^3 + 3s^2 + 3s + 1}$

ii)  $V_2(s) = \frac{10}{s(s+3)}$

(06 Marks)

**Module-5**

- 9 a. A 3 phase supply with line voltage of 250V has a unbalanced Delta connected load as shown in Fig.Q9(a). Determine line currents, active and reactive power for phase sequence A B C.

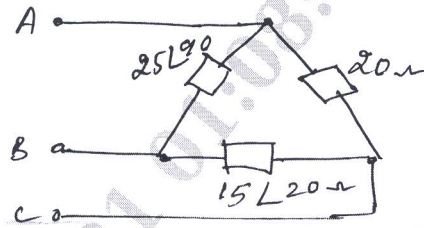


Fig.Q9(a)

(10 Marks)

- b. An unbalanced 4 wire star connected load has a balanced supply of 400V. For the phase sequence ABC, calculate the line currents and total power of the circuit shown in Fig.Q9(b).

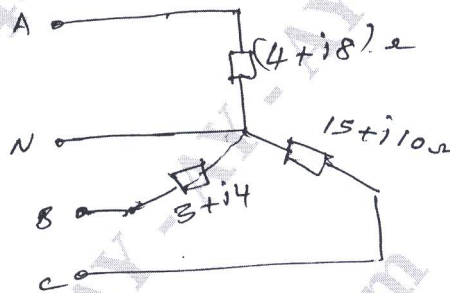


Fig.Q9(b)

(10 Marks)

**OR**

- 10 a. Obtain the Impedance parameters in terms of Admittance parameters.  
 b. For the network shown in Fig.Q10(b) determine z-parameters.

(10 Marks)

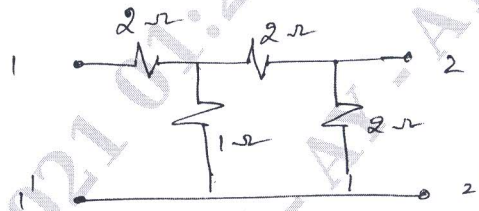


Fig.Q10(b)

(10 Marks)

\*\*\*\*\*