

USN

--	--	--	--	--	--	--	--	--	--


10EC763

Seventh Semester B.E. Degree Examination, Dec.2019/Jan.2020

Image Processing

Max. Marks:100

Note: Answer any FIVE full questions, selecting at least TWO questions from each part.



PART - A

- 1 a. Define a digital image. With neat diagram, explain the components of image processing system. (10 Marks)
- b. Briefly explain:
  - i) Brightness adaptation and discrimination
  - ii) Weber ratio
  - iii) Mach bands
 (10 Marks)
- 2 a. Explain in detail the image acquisition using the three principal sensor arrangements. (10 Marks)
- b. Consider the two image subsets,  $S_1$  and  $S_2$ , shown in the Fig.Q2(b). For  $V = \{1\}$ , determine and explain whether these are (i) 4-adjacent (ii) 8-adjacent (iii) m-adjacent.




Fig.Q2(b)

(06 Marks)

- c. Consider the image shown in Fig.Q2(c). Let  $V = \{1, 2\}$ 
  - (i) compute length of shortest m-path
  - (ii) compute  $D_4$  distance between the points p and q.




Fig.Q2(c)

(04 Marks)

- 3 a. Define unitary transforms. Explain the properties of unitary transforms. (06 Marks)
- b. Calculate the transformed image V and the basis images for the orthogonal matrix A and image U.

$$A = \frac{1}{\sqrt{2}} \begin{pmatrix} 1 & 1 \\ 1 & -1 \end{pmatrix}$$

$$U = \begin{pmatrix} 2 & 3 \\ 1 & 2 \end{pmatrix}$$

(06 Marks)

- c. Explain in brief the following properties of 2D - Discrete Fourier Transforms:
  - (i) Separability
  - (ii) Translation

(08 Marks)

Important Note : 1. On completing your answers, compulsorily draw diagonal cross lines on the remaining blank pages.  
2. Any revealing of identification, appeal to evaluator and /or equations written eg, 42+8 = 50, will be treated as malpractice

- 4 a. Define 2-D forward and inverse discrete cosine transform, and mention its properties. (08 Marks)
- b. Generate  $8 \times 8$  Hadamard transform matrix. The core matrix  $H_1 = \frac{1}{\sqrt{2}} \begin{bmatrix} 1 & 1 \\ 1 & -1 \end{bmatrix}$  indicate its sequency. (04 Marks)
- c. Explain Haar transformation with its properties. Compute Haar transformation of image  $F = \begin{bmatrix} 3 & -1 \\ 6 & 2 \end{bmatrix}$ . (08 Marks)

**PART – B**

- 5 a. With necessary graphs, explain the spatial enhancement operations:  
 i) Power law transformation  
 ii) Gray level slicing  
 iii) Contrast stretching  
 iv) Bit plane slicing (12 Marks)
- b. Derive the equation for histogram equalization. (08 Marks)
- 6 a. Explain with a block diagram, the basic steps for image filtering in frequency domain. (08 Marks)
- b. Explain highpass butterworth filter. (06 Marks)
- c. List the steps involved in homomorphic filtering. (06 Marks)
- 7 a. Explain the basic model for image degradation/restoration process. (06 Marks)
- b. Explain inverse filtering with necessary equations. (06 Marks)
- c. Explain any four noise models with necessary equations and graphs. (08 Marks)
- 8 a. Explain different color models. (10 Marks)
- b. Explain pseudo coloring. (06 Marks)
- c. How many minutes it will take to transmit a  $1024 \times 1024$  colour image with 256 shades of RGB. Assume 56 Kbps modem is used for transmission? (04 Marks)

\* \* \* \* \*