

# CBCS SCHEME

17EC35

## Third Semester B.E. Degree Examination, Dec.2019/Jan.2020 Network Analysis

Time: 3 hrs.

Max. Marks: 100

Note: Answer any FIVE full questions, choosing ONE full question from each module.

### Module-1

- 1 a. Derive the expression for: (i)  $\Delta$  to Y transformation (ii) Y to  $\Delta$  transformation (10 Marks)
- b. Calculate the voltage across the  $6\Omega$  resistor in the network of Fig.Q1(b) using source shifting technique.

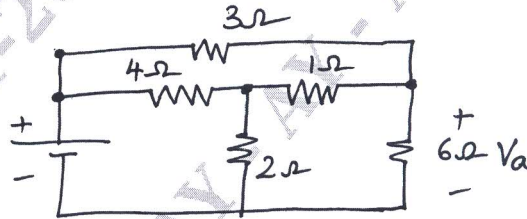


Fig.Q1(b)

(10 Marks)

OR

- 2 a. Determine the resistance between the terminals A and B of the network shown in Fig.Q2(a).

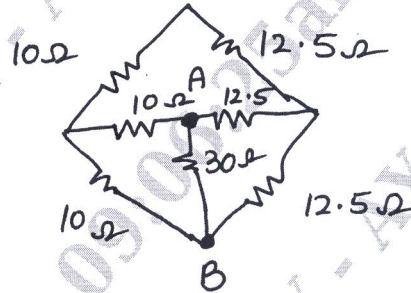


Fig.Q2(a)

(10 Marks)

- b. Find currents in all the branches of the network shown in Fig.Q2(b) using mesh analysis.

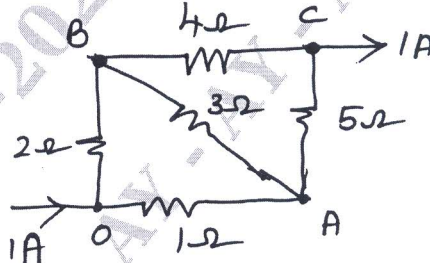


Fig.Q2(b)

(05 Marks)

- c. Find voltages  $V_1$  and  $V_2$  in the network shown in Fig.Q2(c) using node analysis method.

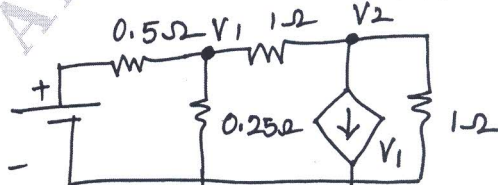


Fig.Q2(c)

(05 Marks)

**Module-2**

- 3 a. Obtain Thevenin's equivalent network for Fig.Q3(a).

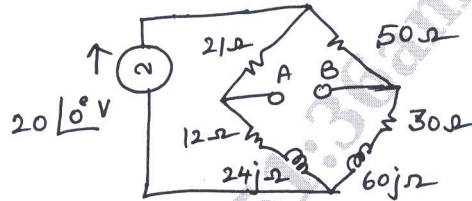


Fig.Q3(a)

(08 Marks)

- b. State and prove Millman's theorem.  
 c. For the circuit shown in Fig.Q3(c), find the voltage  $V_x$  and verify reciprocity theorem.

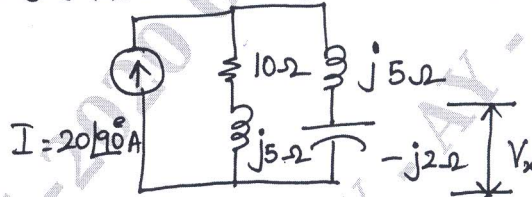


Fig.Q3(c)

(06 Marks)

**OR**

- 4 a. State and prove maximum power transfer theorem for AC circuits (when  $R_L$  and  $X_L$  are varying)  
 b. Find 'V' in the circuit shown in Fig.Q4(b) using super position theorem.

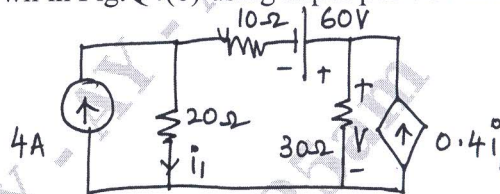


Fig.Q4(b)

(10 Marks)

**Module-3**

- 5 a. What is the significance of initial conditions? Write a note on initial and final conditions for basic circuit elements.  
 b. In the network shown in Fig.Q5(b) switch 'S' is changed from A to B at  $t = 0$  having already established a steady state in position A shown that at  $t = 0^+$ ,  $i_1 = i_2 = \frac{-V}{R_1 + R_2 + R_3}$  and  $i_3 = 0$ .

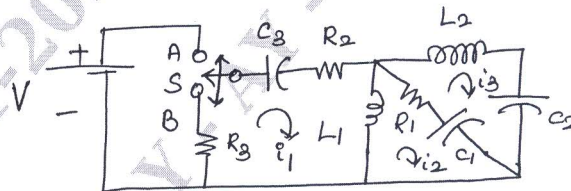


Fig.Q5(b)

(10 Marks)

- c. In the network of Fig.Q5(c) switch 'S' is closed at  $t = 0$  with zero initial current in the inductor. Find  $i$ ,  $\frac{di}{dt}$  and  $\frac{d^2i}{dt^2}$  at  $t = 0^+$  if  $R = 10 \Omega$ ,  $L = 1 \text{ H}$  and  $V = 10 \text{ Volts}$ .

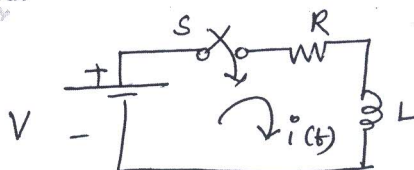


Fig.Q5(c)

(05 Marks)

OR

- 6 a. Obtain Laplace transform of:  
 (i) Step function  
 (ii) Ramp function  
 (iii) Impulse function

(10 Marks)

- b. Find the Laplace transform of the waveform shown in Fig.Q6(b).

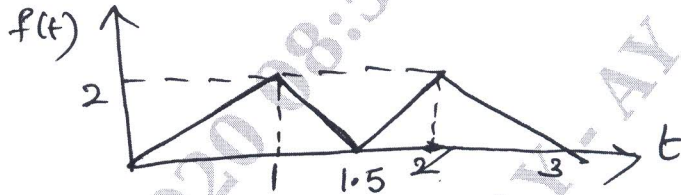


Fig.Q6(b)

(10 Marks)

**Module-4**

- 7 a. Derive the relation between bandwidth and quality factor  $B.W = f_0/Q$ . (10 Marks)  
 b. Show that the value of capacitance for max voltage across the capacitor in case of capacitor tuning series resonance is given by  $C = \frac{L}{R^2 + X_L^2}$ .

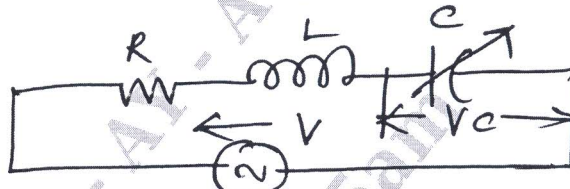


Fig.Q7(b)

(10 Marks)

OR

- 8 a. Derive for  $f_0$  for parallel resonance circuit when the resistance of the capacitance is considered.

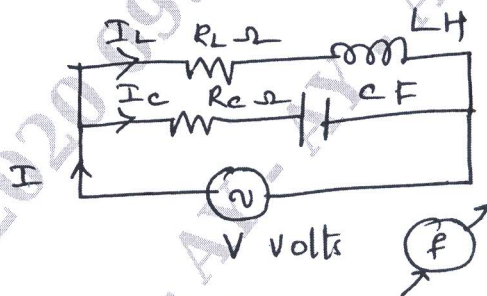


Fig.Q8(a)

(10 Marks)

- b. Find the value of L for which the circuit in Fig.Q8(b) resonates at  $\omega = 5000$  rad/sec.

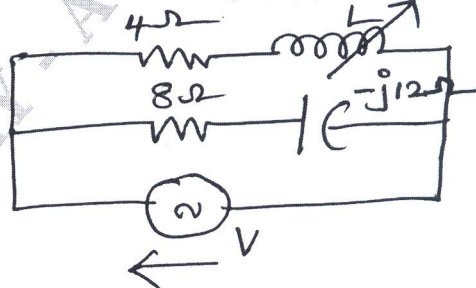


Fig.Q8(b)

(10 Marks)

**Module-5**

- 9 a. Derive the expression of Z parameters in terms of Y parameters. (10 Marks)  
 b. Determine Y and Z parameters for the network shown in Fig.Q9(b).

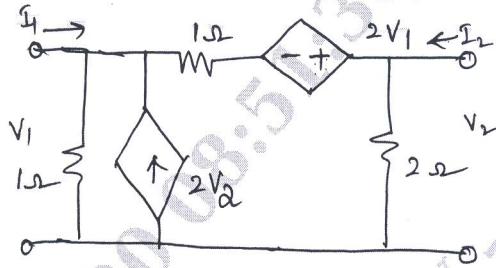


Fig.Q9(b)

(10 Marks)

**OR**

- 10 a. Derive the expression of h parameters in terms of ABCD parameters. (10 Marks)  
 b. Find ABCD constants and show that  $AD - BC = 1$  for the network shown in Fig.Q10(b).

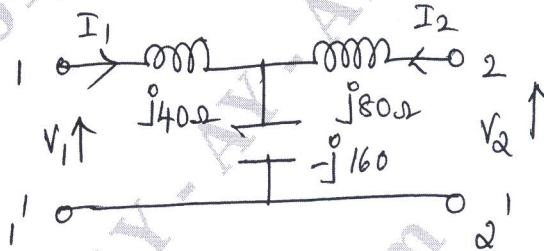


Fig.Q10(b)

(10 Marks)

\*\*\*\*\*