

# CBCS Scheme

USN

--	--	--	--	--	--	--	--	--	--

15EE32

**Third Semester B.E. Degree Examination, Dec.2017/Jan.2018**

## Electric Circuit Analysis

Time: 3 hrs.

Max. Marks: 80

**Note: Answer any FIVE full questions, choosing ONE full question from each module.**

### Module-1

1. a. Distinguish between :i) active and passive elements ii) ideal and practical sources. (04 Marks)
- b. Determine the currents  $i_1$ ,  $i_2$  and  $i_3$  in the circuit of Fig.Q1(b), using Mesh current method. (06 Marks)

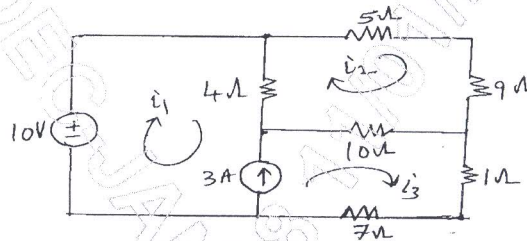


Fig.Q1(b)

- c. Find the node voltages for the circuit of Fig.Q1(c) using nodal analysis. (06 Marks)

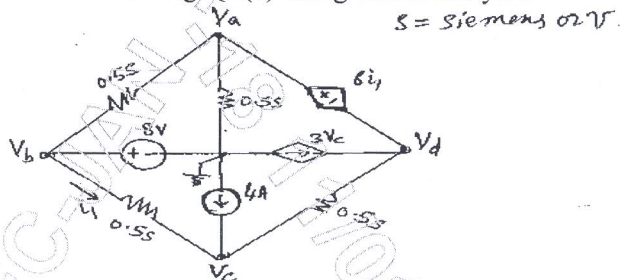


Fig.Q1(c)

OR

2. a. Find the equivalent resistance across a – b, of the circuit, of Fig.Q2(a) using delta –star conversion. (04 Marks)

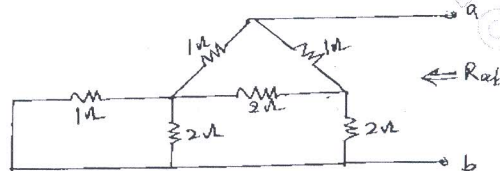


Fig.Q2(a)

- b. A series resonance circuit has  $R = 10\Omega$ ,  $L = 5\text{mH}$ , and  $C = 20\mu\text{F}$ . Find the following :  
 i) Resonant frequency ii) Q – factor and iii) Current at resonance condition, if the applied voltage is 100V. Hence derive the expressions for the same. (08 Marks)
- c. Draw the dual of the network shown in Fig.Q2(c). (04 Marks)

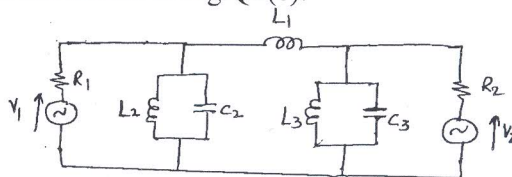


Fig.Q2(c)

Important Note : 1. On completing your answers, compulsorily draw diagonal cross lines on the remaining blank pages.  
 2. Any revealing of identification, appeal to evaluator and /or equations written eg. 42+8 = 50, will be treated as malpractice.

Module-2

- 3 a. State and explain maximum power transfer theorem for DC circuit [resistive load]. (06 Marks)  
 b. Find the Thevenin's and Norton's equivalent circuit for the network shown in Fig.Q3(b), as seen from the terminals a – b. (10 Marks)

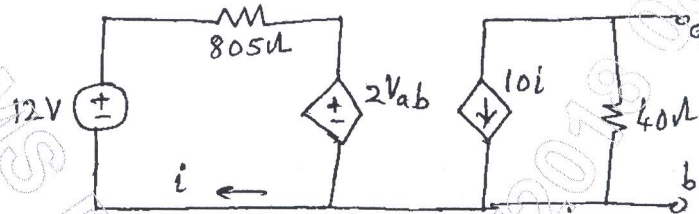


Fig.Q3(b)

OR

- 4 a. State and prove reciprocity theorem. (06 Marks)  
 b. Using super position theorem, find the current I in the network shown in Fig.Q4(b). (10 Marks)

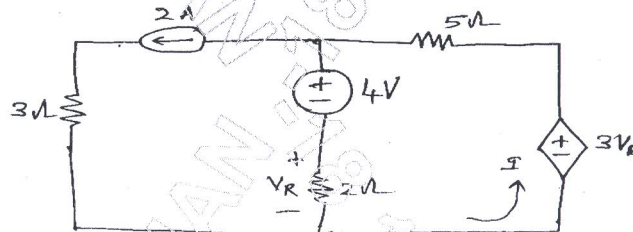


Fig.Q4(b)

Module-3

- 5 a. What are initial conditions and their use in network analysis? (04 Marks)  
 b. For the network elements R, L and C, write the equivalent circuits :  
 i) At  $t = 0^+$  [initial condition]  
 ii) At  $t = \infty$  [Final condition]. (06 Marks)  
 c. In the network shown in Fig.Q5(c), the switch K is closed at  $t = 0$  with the capacitor uncharged. Find the values for  $i$ ,  $\frac{di}{dt}$  and  $\frac{d^2i}{dt^2}$  at  $t = 0^+$ . (06 Marks)

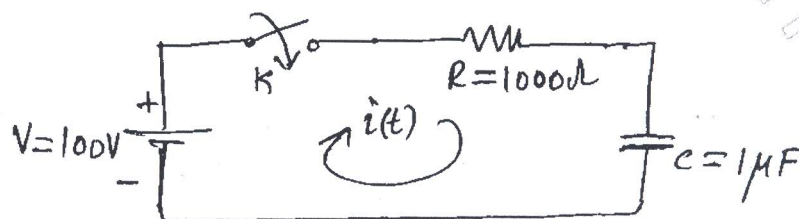


Fig.5Q(c)

OR

- 6 a. In the network of Fig.Q6(a), the switch K is changed from position a to b at  $t = 0$ . Solve for  $i$ ,  $\frac{di}{dt}$  and  $\frac{d^2i}{dt^2}$  at  $t = 0^+$ . Assume steady state condition for K in position 'a'. (08 Marks)

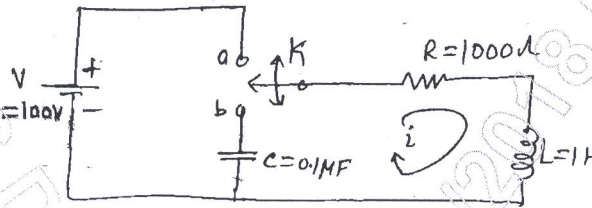


Fig.Q6(a)

- b. The network shown in Fig.Q6(b), has the switch k opened at  $t = 0$ . Solve for  $V$ ,  $\frac{dV}{dt}$  and  $\frac{d^2V}{dt^2}$  at  $t = 0^+$ . (08 Marks)

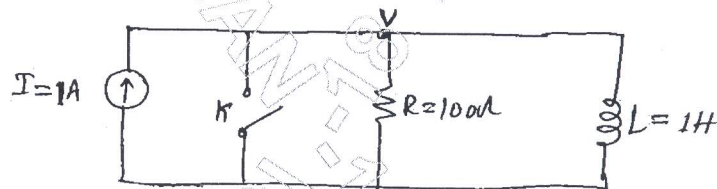


Fig.Q6(b)

Module-4

- 7 a. Obtain the Laplace transform of:  
 i) Ramp function  $t u(t)$   
 ii) Exponential function  $e^{-at} u(t)$   
 iii) Sinusoidal function  $\sin \omega t u(t)$ . (06 Marks)
- b. Find the Laplace transform of  
 i)  $V(t) = 4s(t - 2) - 3t u(t)$   
 ii)  $V(t) = u(t) u(t - 2)$ . (04 Marks)
- c. In a series RLC circuit, the capacitor is initially charged to voltage  $V_0 = 1V$ , with the switch K open. Find the circuit  $i(t)$  if the switch K is closed at  $t = 0$ , using Laplace transform method. Refer Fig.Q7(c). (06 Marks)

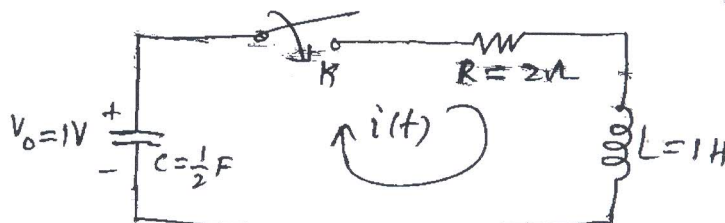


Fig.Q7(c)



OR

- 8 a. State and prove final value theorem. (06 Marks)

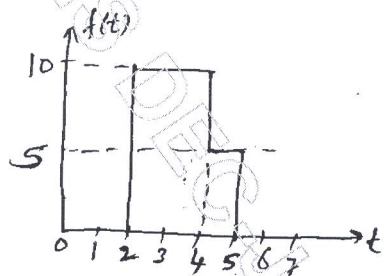
- b. Determine the initial value  $f(0)$  and final value  $f(\infty)$  for the function given by:

$$f(s) = \frac{5s^2 + 10}{2s[s^2 + 3s + 5]}$$

(04 Marks)

- c. Find the Laplace transforms of the following waveforms (Refer Fig.Q8(c)). (06 Marks)

i)



ii)

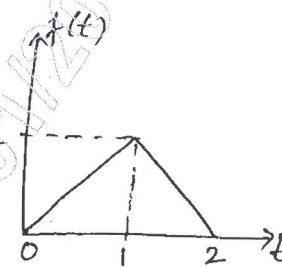


Fig.Q8(c)

**Module-5**

- 9 a. Define y-parameters and T-parameters of a two – port network. Write the conditions for symmetry and reciprocity. (04 Marks)
- b. Obtain y-parameters in terms of T-parameters. (06 Marks)
- c. Find y-parameters for the network shown in Fig.Q9(c). (06 Marks)

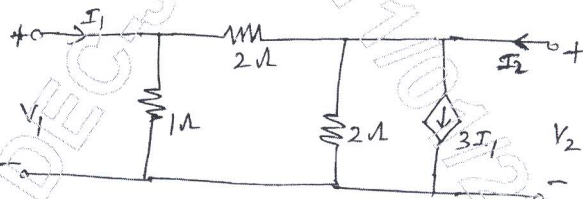


Fig.Q9(c)

OR

- 10 a. Find an expression for driving point impedance  $z(s)$  of the R-C ladder network shown in Fig.Q10(a). Also draw the pole-zero diagram. (08 Marks)

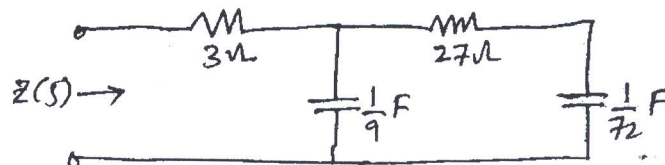


Fig.Q10(a)

- b. Find the effective voltage, effective current and the average power supplied to a passive network if the applied voltage,  $V = 200 + 100 \cos [500t + 30^\circ] + 75 \cos [1500t + 60^\circ]$ , volts and the resulting current is,  $i = 3.53 \cos [500t + 75^\circ] + 3.55 \cos [1500t + 78.45^\circ]$ , Amps.

(08 Marks)

\*\*\*\*\*