

CBCS Scheme

USN

--	--	--	--	--	--	--	--	--	--

15EE61

Sixth Semester B.E. Degree Examination, June/July 2018

Control System

Time: 3 hrs.

Max. Marks: 80

Note: Answer FIVE full questions, choosing one full question from each module.

Module-1

- 1 a. With the help of neat block diagram, define open loop and closed loop control system. Mention any four difference between open loop and closed loop control system. (08 Marks)
- b. Construct mathematical model for the mechanical system shown in Fig. Q1 (b). Draw electrical equivalent network based on force voltage analogy. (08 Marks)

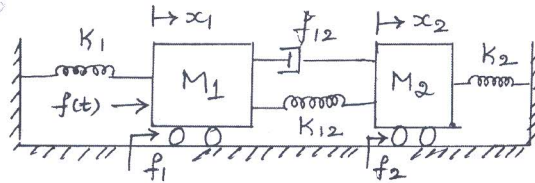


Fig. Q1 (b)

- OR

- 2 a. Draw an equivalent mechanical network using force voltage analogy as shown in Fig. Q2 (a). (08 Marks)

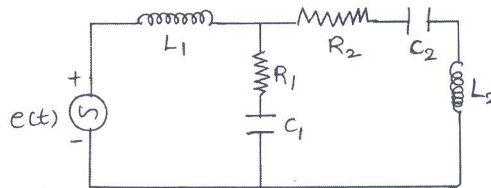


Fig. Q2 (a)

- b. For the mechanical translation system as shown in Fig. Q2 (b). Draw the electrical network based on torque current analogy. Write its performance equations. (08 Marks)

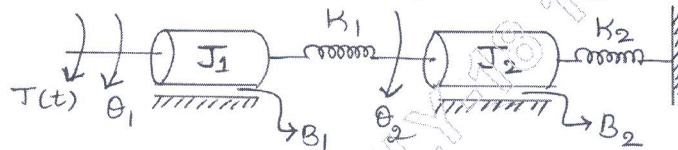


Fig. Q2 (b)

Module-2

- 3 a. Illustrate how to perform the following connection with block diagram reduction technique, (i) Shifting summing point after a block (ii) Shifting take off point ahead of a block. (04 Marks)
- b. Draw a signal flow graph and find its transfer function as shown in Fig. Q3 (b). (06 Marks)

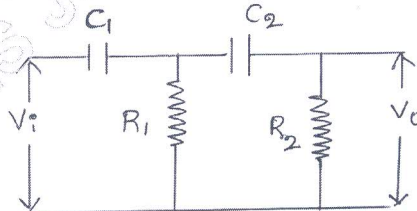


Fig. Q3 (b)

Important Note : 1. On completing your answers, compulsorily draw diagonal cross lines on the remaining blank pages.
2. Any revealing of identification, appeal to evaluator and /or equations written eg. 42+8 = 50, will be treated as malpractice.

- c. Determine the transfer function, $\frac{C(s)}{R(s)}$ of a system shown in Fig. Q3 (c). (06 Marks)

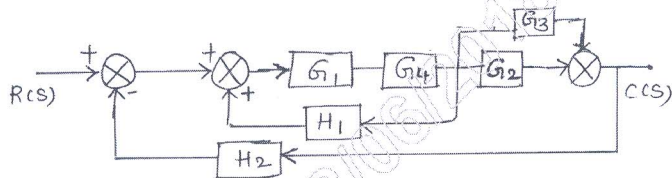


Fig. Q3 (c)

OR

- 4 a. Obtain $\frac{C(s)}{R(s)}$ using block diagram reduction rule. (08 Marks)

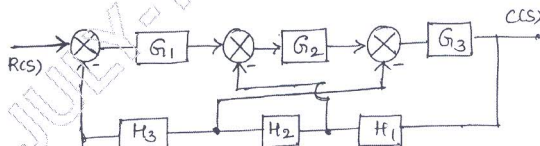


Fig. Q4 (a)

- b. Find the transfer function $\frac{x_5}{x_1}$ to the signal flow graph shown in Fig. Q4 (b). Apply the Mason's gain formula. (08 Marks)

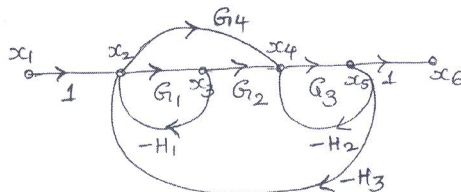


Fig. Q4 (b)

Module-3

- 5 a. What are necessary and sufficient condition for a system to be stable according to RH criteria. (04 Marks)
 b. Determine the stability of the system represent by following characteristic equation, $s^5 + 4s^4 + 8s^3 + 8s^2 + 7s + 4 = 0$. (04 Marks)
 c. The system shown in Fig. Q5 (c) when subjected to a unit step input gives an output response shown in Fig. Q5 (c). Determine the value of K and T from response curve. (08 Marks)

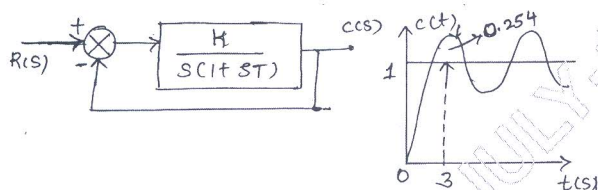


Fig. Q5 (c)

OR

- 6 a. A system oscillate with frequency " ω " if it has a pole at $s = \pm j\omega$ and no pole in right half of s plane. Determine the value of K and 'a' so that the system shown in Fig. Q6 (a). Oscillate at a frequency of 2 rad/sec. (08 Marks)

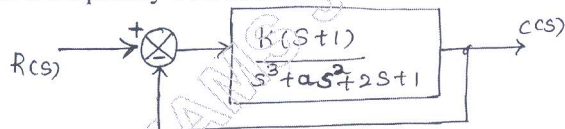


Fig. Q6 (a)

- b. For the system $G(s)H(s) = \frac{K}{s^2(s+2)(s+3)}$ find the value of K to limit steady state error to

10 unit when input to the system is $1 + 10t + \frac{40t^2}{2}$.

(08 Marks)

Module-4

- 7 a. For a single loop unity feedback system whose open loop transfer function is $G(s) = \frac{K(s+3)}{s(s+2)}$ show that complex part of root locus is a circle and identify center and radius. (06 Marks)
- b. Draw the bode plot for the system having $G(s) = \frac{10}{s(1+0.01s)(1+0.1s)}$, $H(s) = 1$. Determine :
- Gain crossover frequency and phase margin. (10 Marks)
 - Phase cross over frequency and gain margin. (10 Marks)

OR

- 8 a. Sketch complete root locus of system having $G(s)H(s) = \frac{K}{s(s+1)(s+2)(s+3)}$. (10 Marks)
- b. Find the open loop transfer function of a system whose approximate plot is as shown in Fig. Q8 (b). (06 Marks)

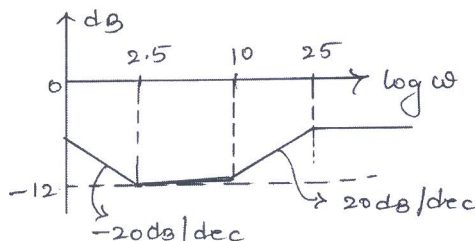


Fig. Q8 (b)

Module-5

- 9 a. Explain the step by step design procedure of lead compensation network. (08 Marks)
- b. Sketch the Nyquist plot by unity feedback system whose open loop transfer function, $G(s) = \frac{5}{s(1-s)}$. Determine stability of a system using Nyquist stability criteria. (08 Marks)

OR

- 10 a. Explain Nyquist stability criteria. (04 Marks)
- b. What is controller? Explain the effect of PI and PD controller on second order system. (06 Marks)
- c. Explain the principle of Argument in Nyquist stability criteria. (06 Marks)
