

| | | | | | | | | | |
|--|--|--|--|--|--|--|--|--|--|
| | | | | | | | | | |
|--|--|--|--|--|--|--|--|--|--|

Third Semester B.E. Degree Examination, Dec.2018/Jan.2019 Electric Circuit Analysis

Time: 3 hrs.

Max. Marks: 100

Note: Answer any FIVE full questions, choosing one full question from each module.

Module-1

- 1 a. Find an equivalent resistance between A and B for the network given in Fig. Q1 (a) using star-delta transformation. (06 Marks)

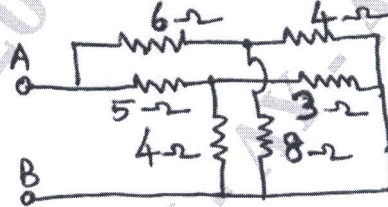


Fig. Q1 (a)

- b. Find the currents i_1 , i_2 and i_3 in the network given in Fig. Q1 (b) using mesh analysis. (06 Marks)

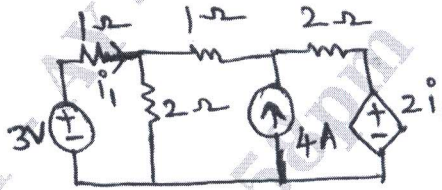


Fig. Q1 (b)

- c. Find the power dissipated in 10 Ω resistor by nodal analysis in Fig. Q1 (c). (08 Marks)

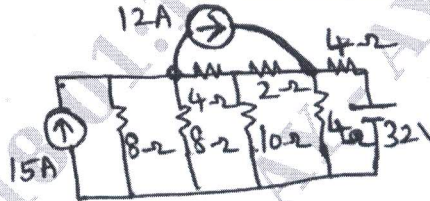


Fig. Q1 (c)

OR

- 2 a. Distinguish between (i) Active and Passive elements (ii) Ideal and practical sources. (04 Marks)
- b. Find the node voltage V_1 , V_2 and V_3 in the circuit diagram shown in Fig. Q2 (b) using nodal analysis. (08 Marks)

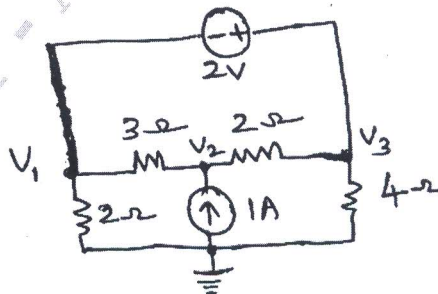


Fig. Q2 (b)

- c. Find the current i_a in the circuit given in Fig. Q2 (c) using mesh analysis.

(08 Marks)

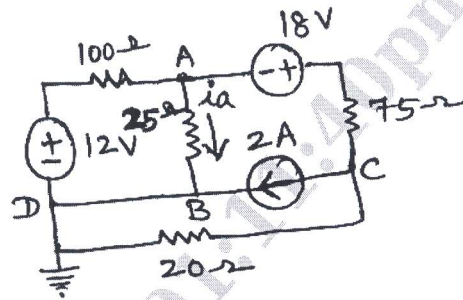


Fig. Q2 (c)

Module-2

- 3 a. State and explain super position theorem. (06 Marks)
 b. Find the Thevenin's voltage, short circuit current and determine the actual current flowing through the $6\ \Omega$ resistor in the network given in Fig. Q3 (b). (07 Marks)

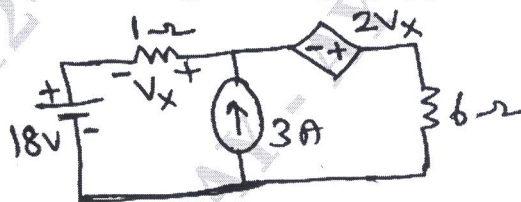


Fig. Q3 (b)

- c. Find the current through $16\ \Omega$ resistor in the network given in Fig. Q3 (c) using Norton's theorem. (07 Marks)

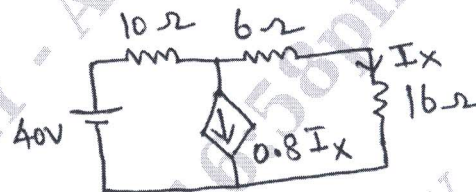


Fig. Q3 (c)

OR

- 4 a. Verify the reciprocity theorem for the voltage V and current I in the network given in Fig. Q4 (a). (08 Marks)

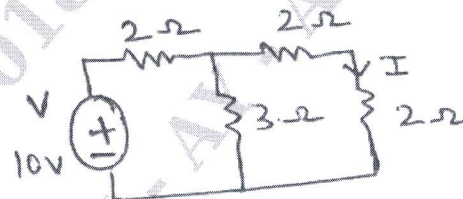


Fig. Q4 (a)

- b. Find the value of load resistance R_L when maximum power is transferred across it in the network shown in Fig. Q4 (b). (04 Marks)

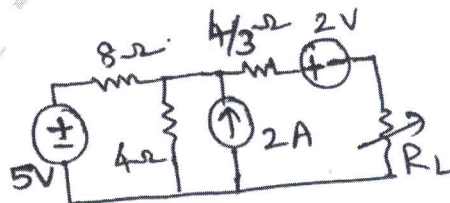


Fig. Q4 (b)

- c. Find the current through R_L using Thevenin's theorem for the network in the Fig. Q4 (c). (08 Marks)

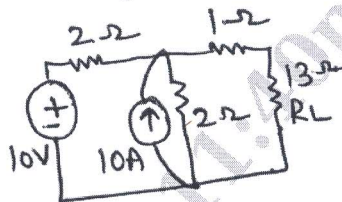


Fig. Q4 (c)

Module-3

- 5 a. Derive expression for resonant frequency in series RLC circuit. (06 Marks)
 b. A series RLC circuit has $R = 4 \Omega$, $L = 1 \text{ mH}$ and $C = 10 \mu\text{F}$. Calculate Q factor, bandwidth, resonant frequency and half power frequencies. (08 Marks)
 c. Find the equation of current if the switch is closed at $t = 0$. Find also the voltage across L and R, the current at $t = 0.1 \text{ sec}$ and the time at which the voltage across L and R are equal in the Fig. Q5 (c). (06 Marks)



Fig. Q5 (c)

OR

- 6 a. Find I_o , I_c , I_L , Q factor, resonant frequency and parallel resonance for the parallel resonant circuit shown in Fig. Q6 (a). (08 Marks)

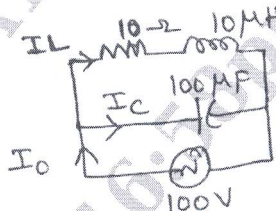


Fig. Q6 (a)

- b. In the Fig. Q6 (b), the switch S is closed at $t = 0$, find the time when the current from the battery reaches to 500 mA. (08 Marks)

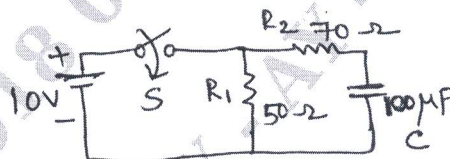


Fig. Q6 (b)

- c. What are the initial conditions and their use in network analysis? (04 Marks)

Module-4

- 7 a. State and prove initial value theorem and final value theorem. (08 Marks)
 b. Find the Laplace transform of the, (i) $f(t) = 5 + 4e^{-2t}$ (ii) $e^{-at} \sin \omega t$ (04 Marks)
 c. Obtain the Laplace transform of the function shown in Fig. Q 7(c). (08 Marks)

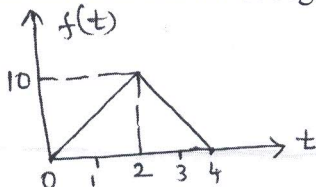


Fig. Q7 (c)

OR

- 8 a. Find the inverse Laplace transform,

(i) $\frac{s^2 + 5}{s(s^2 + 4s + 4)}$ (ii) $\frac{2s + 6}{s^2 + 6s + 25}$

(06 Marks)

- b. Obtain Laplace transform of,

(i) $f(t) = 5(t-2)u(t-1)$

(ii) $f(t) = 4e^{-3t}[u(t+2) - u(t-2)]$

(iii) $\delta(t)$

(iv) $u(t)$

(08 Marks)

- c. Sketch the waveforms,

(i) $tu(t-T)$ (ii) $(t-T)u(t-T)$ (iii) $u(-t)$ (iv) $tu(t+T)$

(06 Marks)

Module-5

- 9 a. Determine the line currents and total power supplied to a delta connected load of
- $Z_{ab} = 10\angle 60^\circ \Omega$
- ,
- $Z_{bc} = 20\angle 90^\circ \Omega$
- and
- $Z_{ca} = 25\angle 30^\circ \Omega$
- . Assume a 3 phase, 400 V, ABC system.

(08 Marks)

- b. Define Z and Y parameters.

(04 Marks)

- c. Find the Z parameters of the network shown in Fig. Q9 (c).

(08 Marks)

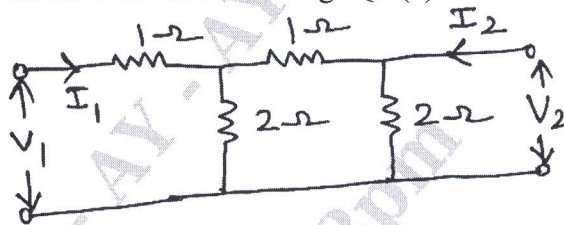


Fig. Q9 (c)

OR

- 10 a. Determine the line currents in an unbalanced star connected load supplied from a symmetrical 3 phase, 440 V system. The branch impedances are
- $Z_R = 4\angle 30^\circ \Omega$
- ,

$Z_Y = 10\angle 45^\circ \Omega$ and $Z_B = 10\angle 60^\circ \Omega$. The phase sequence is RYB.

(08 Marks)

- b. Find Y-parameters for the network shown in Fig. Q10 (b)

(08 Marks)




Fig. Q10 (b)

- c. Write the conditions for symmetry and reciprocity of Z and Y parameters of a two port network.

(04 Marks)
